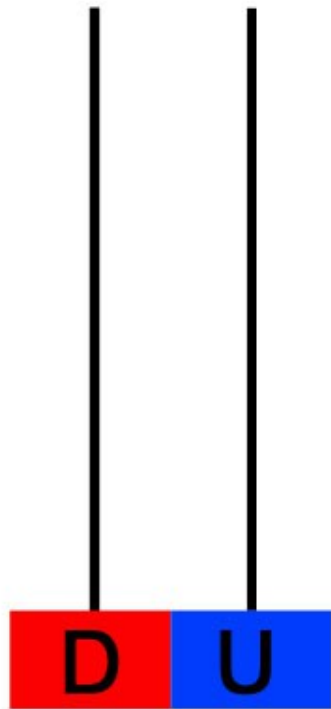



ACTIVIDADES

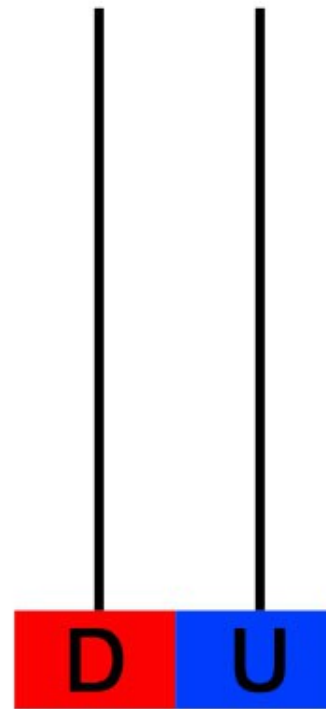
- Completa los ábacos



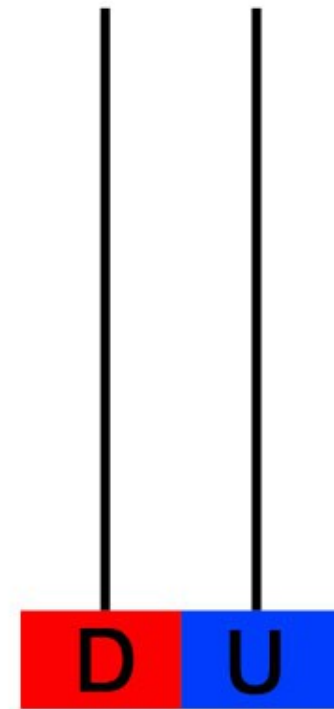
41



45



44



47



- Escribe el número que falta.

$$41 < \bigcirc < 43$$

$$25 < \bigcirc < 27$$

$$19 < \bigcirc < 21$$

$$37 < \bigcirc < 39$$

$$9 < \bigcirc < 11$$

- Continúa la serie

40	41								
----	----	--	--	--	--	--	--	--	--

